

Dear Children,

It's again that time of the year where you engage yourself in building up your creative, analytical and organizational skills thereby putting together your individual and collective energies, resources and talents.

YES, IT'S TIME FOR SUMMER HOLIDAYS



Here are certain ways by which you can spend your holidays meaningfully.

- Relax, eat healthy and play indoor games and follow a schedule.
- Help your parents in day to day household chores.
- Holiday homework should be done as per the instructions given for each subject.
- Kindly complete your holiday homework yourself by 11th June 2021 and upload it separately for each subject through Google link shared by the teachers in their respective subject classrooms.

Stay Home, Stay Safe!

Wish you all a very Happy Holiday!

ENGLISH:

Instructions: The written work is to be done in the Expressions notebook.

The summer holidays are a great time to enjoy experiences and make memories with family, friends and loved ones.

Here are some fun activities for you:

THE ONE WHO INSPIRES ME

1. A superhero is someone we adore, who gives us strength and helps us when things get tough in our lives. Who do you consider a superhero in your life? Write a short paragraph of about 150 words describing your superhero with their unique powers and qualities.

LEARN NEW WORDS

2. Write 20 new words that you learnt during your summer vacation with their meanings and frame meaningful sentences on them.

BUILD YOUR CHARACTER

3. Read an English book/story and write what moral values/lessons you get from it. Also draw an illustration related to it. (word limit- 80 to 100 words)

PICTURE COMPOSITION

4. Write a composition on the given picture. (word limit- 80 words).



General outline : recreational activity, family organized a picnic, baskets of fruits and snacks, beautiful picnic spot, green trees all around, refreshing weather , spending quality time with family, delicious food cooked by mother

LET'S IMPROVE OUR HANDWRITING

1. Students to write 10 pages following the school script. (to be done in English Grammar Notebook)

LET'S RECITE

2. Learn any one poem from the following:

a. He Leaves the Nest (CB, pg. 37)

OR

b. The Merry Mice (Grammar Book , pg. 90)

Make a video reciting the poem of your choice and upload it in the English Classroom under the topic "Recitation Test"

हिंदी

'पहला सुख नीरोगी काया' ' यह केवल कहावत ही नहीं अपितु सच है। स्वस्थ रहने के लिए व्यायाम व कसरत के साथ-साथ अच्छे खान-पान का होना भी आवश्यक है। स्वस्थ रहने का मूल मंत्र आपके पास ही है। आपकी रसोई घर में है। जी हाँ, आपकी रसोई ही घर का औषधालय है, जो हमें स्वस्थ रखने में प्रमुख भूमिका निभाती है। हमारे स्वास्थ्य की सारी सामग्री हमारे घर की रसोई में ही मौजूद है।

- ❖ रसोई घर में मौजूद ऐसी ही वस्तुओं की सूची बनाकर (कोई पाँच)उनमें विद्यमान औषधीय गुणों (प्रत्येक के कोई दो गुण) को चित्र सहित अभिव्यक्ति फाइल में लिखिए।



"पर्यटकों के दिलों को खूब लुभाता , उत्तर पूर्व में भारत की शान बढ़ाता। सात हज़ार वर्ग किलोमीटर में खूबसूरती फैलाता , भारत का स्विट्ज़रलैंड सिक्किम है कहलाता।"

❖ भारत के छोटे से राज्य सिक्किम की आकृति बनाते हुए नीचे दिए गए विषयों पर जानकारी एकत्रित करें व अभिव्यक्ति फाइल में लिखिए।

वेशभूषा :

खान -पान :

प्रसिद्ध त्योहार :

नेशनल पार्क :

दर्शनीय स्थल :

❖ सप्ताह में तीन दिन हिंदी सुलेख अभिव्यक्ति फाइल में लिखिए।

❖ 'कक्कू' कविता को कंठस्थ (याद) कीजिए।

MATHEMATICS-

General Instructions:

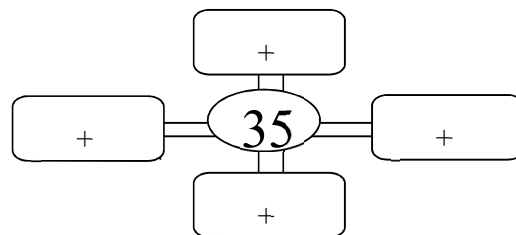
- Homework to be done in **Math Activity File**.
- Work should be done systematically as per the given instructions.
- **Questions need not be copied.** Only the question number (with parts, if any) must be taken down correctly.
- One digit should be written in one box and work should be neat and thorough.

Q1. . Draw a city scene with different geometrical shapes and write the names of the different geometrical shapes used.

Q2. Write the year of birth of all members in your family .


- Arrange the years in descending order.
- Who is the youngest member of your family? Mention his/her age.


Q3. Write different ways to find the sum given in the centre.



Q4. Observe the pattern and fill up the blanks.

i. 5, 10, 15, 20, _____, _____.

ii.  _____, _____.

iii.  _____, _____.

Q5. Paste wrappers of different 5 items / containers and mention the weight of the original item in grams(g) or kilograms(kg). One such sample has been done for you.

Biscuit = 35 grams



MATHEMIND

Complete Exercise numbers 1, 2, 4, 6, 8 and 11 in the Mathemind book.

TABLES (2-10)

LEARN MULTIPLICATION TABLES (2-10)

Colouring Activity

(Draw the following image or paste a printout of the same in the activity file)

Colour the following drawing according to the result of each part.



pink

if your answer is 559



blue

if your answer is 454



orange

if your answer is 975



red

if your answer is 639



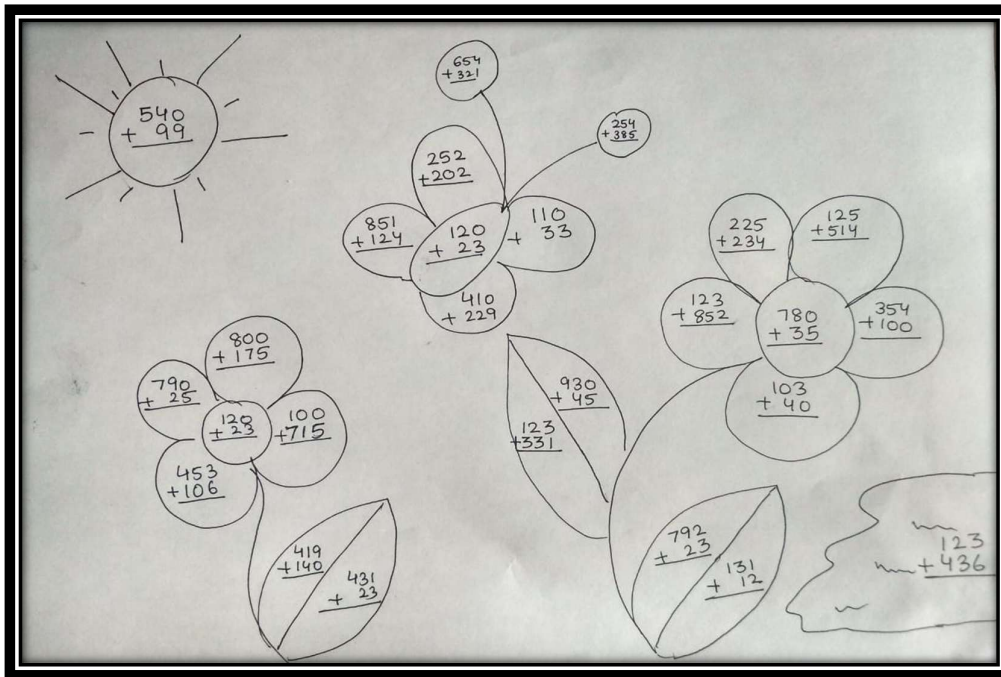
green

if your answer is 143



yellow

if your answer is 815



EVS

General Instructions:

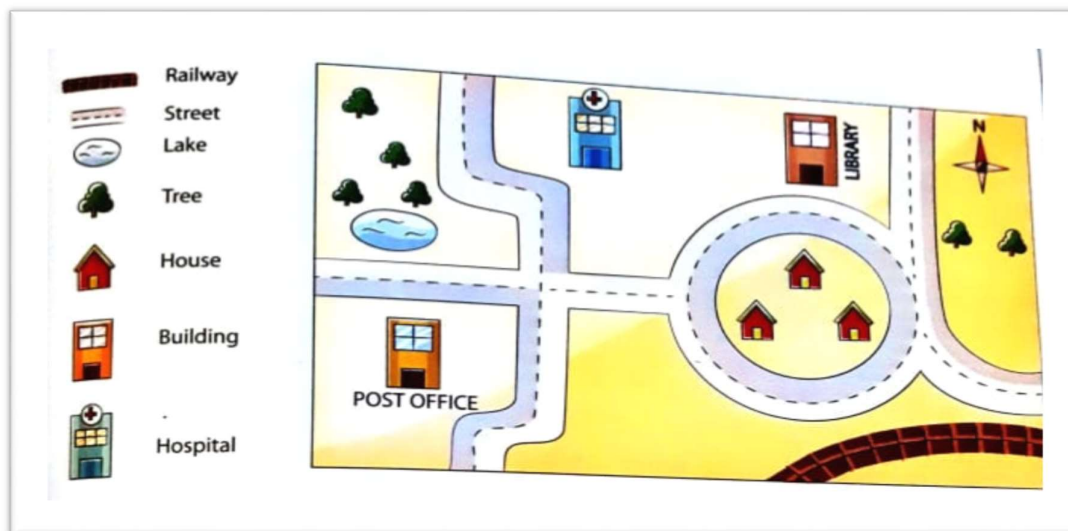
- Homework to be done in EVS Project File.
- Work should be done systematically as per the given instructions.
- Questions must be copied and then answered.

1. Imagine that you are a member of your school environment club.
Create an identity card for yourself.

2. Symbols in Maps-

Simple drawing of an area on a flat surface is called a map. Maps help you find your way in any new place.

Observe some common symbols used in the map and answer the questions given below-



(a) Give the correct direction (North, West, East, South)

1. The railway track is to the _____ of the library.

2. The lake is to the _____ of the post office.

3. The hospital is to the _____ of the lake.

(b) If you are at the post office, is the library nearer or the hospital?

In which direction would you have to travel if you were going from the house to the lake?

2. Water is very essential for life to exist. However, there is no water or air on the Moon. So, life does not exist on the Moon.




Draw a completely new world if Moon had life on it.

4. How animals move-

Different animals can move in different ways. Birds can fly and fish can swim.

Look at the pictures below and write down how each animal moves.



5. The Indian state of Sikkim is located in the north eastern part of the country amid the Himalayan mountains. It is India's second smallest state, after Goa.



Watch the video on virtual tour of Sikkim using the link shared below-

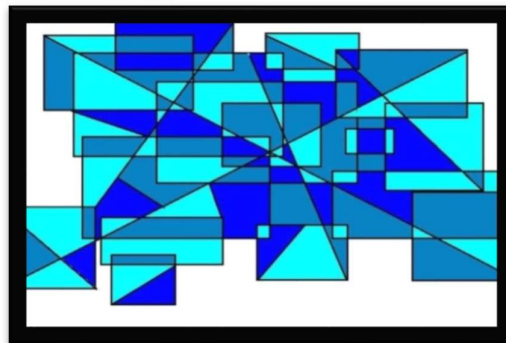

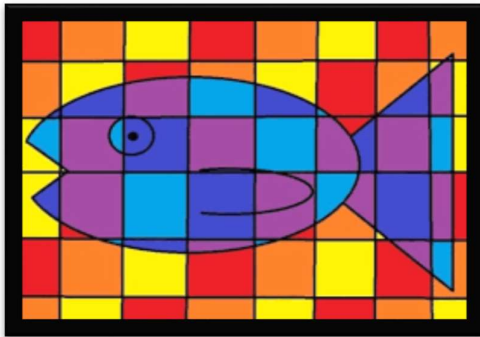
https://youtu.be/uzaXXQHaZ_U

Answer the following questions –

- (a) What is the capital of Sikkim?
- (b) Name any two famous places to visit in Sikkim.
- (c) Name any two famous festivals celebrated in Sikkim.
- (d) Name any two types of animals found in Sikkim.
- (e) Which religion is followed in Sikkim?

COMPUTER SCIENCE:

Design an artwork using different tools in MS Paint. Few pictures are attached for reference.



ART:

Aesthetic Art Book-

Pages-7, 8,10,21,26,31,32,37, 38.